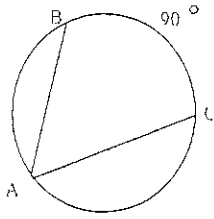


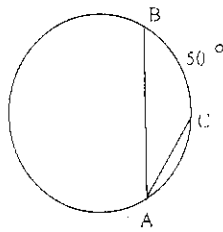
Worksheet-Inscribed Angles and Arcs-Day 2 Notes  
 Geometry

Name \_\_\_\_\_  
 Date \_\_\_\_\_

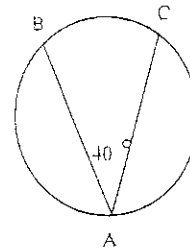
1. Find  $m\angle A$



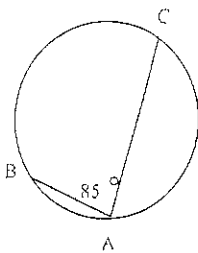
2. Find  $m\angle A$



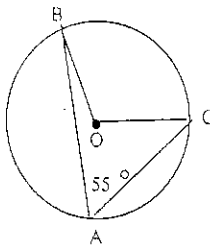
3. Find  $\widehat{BC}$



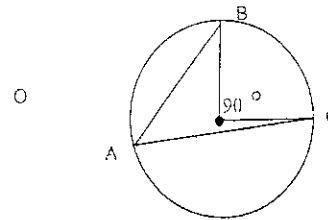
4. Find  $\widehat{BC}$



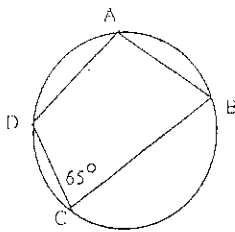
5. Find  $m\angle BOC$



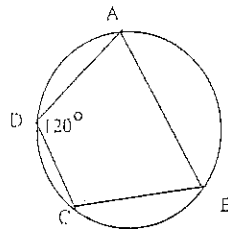
6. Find  $m\angle A$



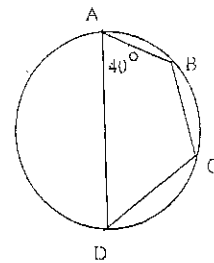
7. Find  $m\angle A$



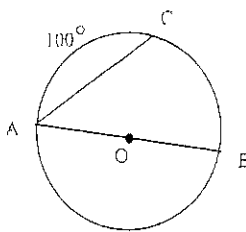
8. Find  $m\angle B$



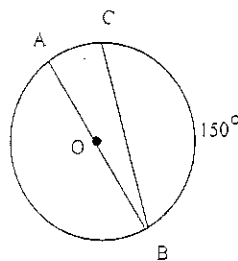
9. Find  $m\angle C$



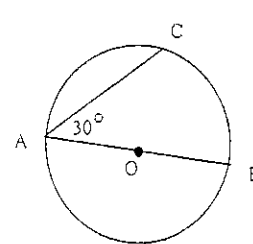
10. Find  $m\angle A$



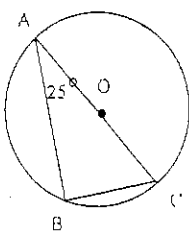
11. Find  $m\angle B$



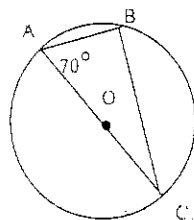
12. Find  $m\widehat{AC}$



13. Find  $m\angle C$



14. Find  $m\angle C$



15. Find  $m\angle C$

